

**Geography**  
**Higher level and standard level**  
**Paper 2 – resources booklet**

Wednesday 18 November 2015 (morning)


---

**Instructions to candidates**

- Do not open this resources booklet until instructed to do so.
- Use the resources as appropriate to the questions in paper 2.

**Option B — Oceans and their coastal margins**

4. The photograph shows part of an advancing coast.



[Source: © International Baccalaureate Organization 2016]

**Option C — Extreme environments**

5. The two photographs show the Qori Kalis Glacier, Quelccaya Ice Cap, Peru. Photograph A was taken in summer 1978; photograph B was taken in summer 2002.

**Photograph A (1978)**



**Photograph B (2002)**



[Source: Lonnie G. Thompson, Byrd Polar Research Center, the Ohio State University]

**Turn over**

6. The photograph was taken at 68° North.

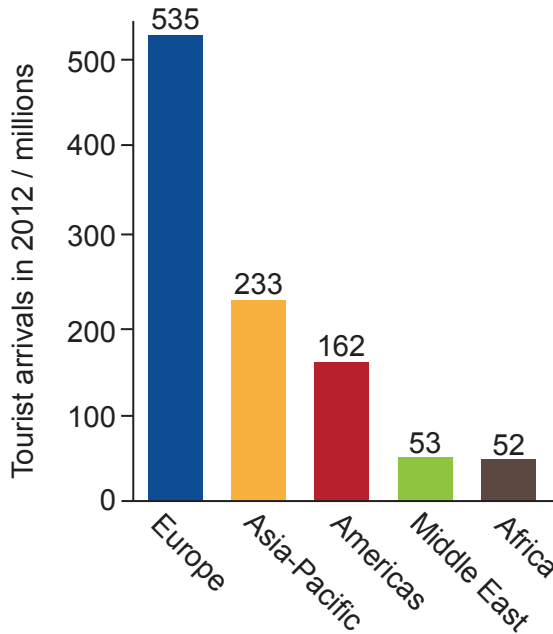


[Source: Used with permission from the photographers.]

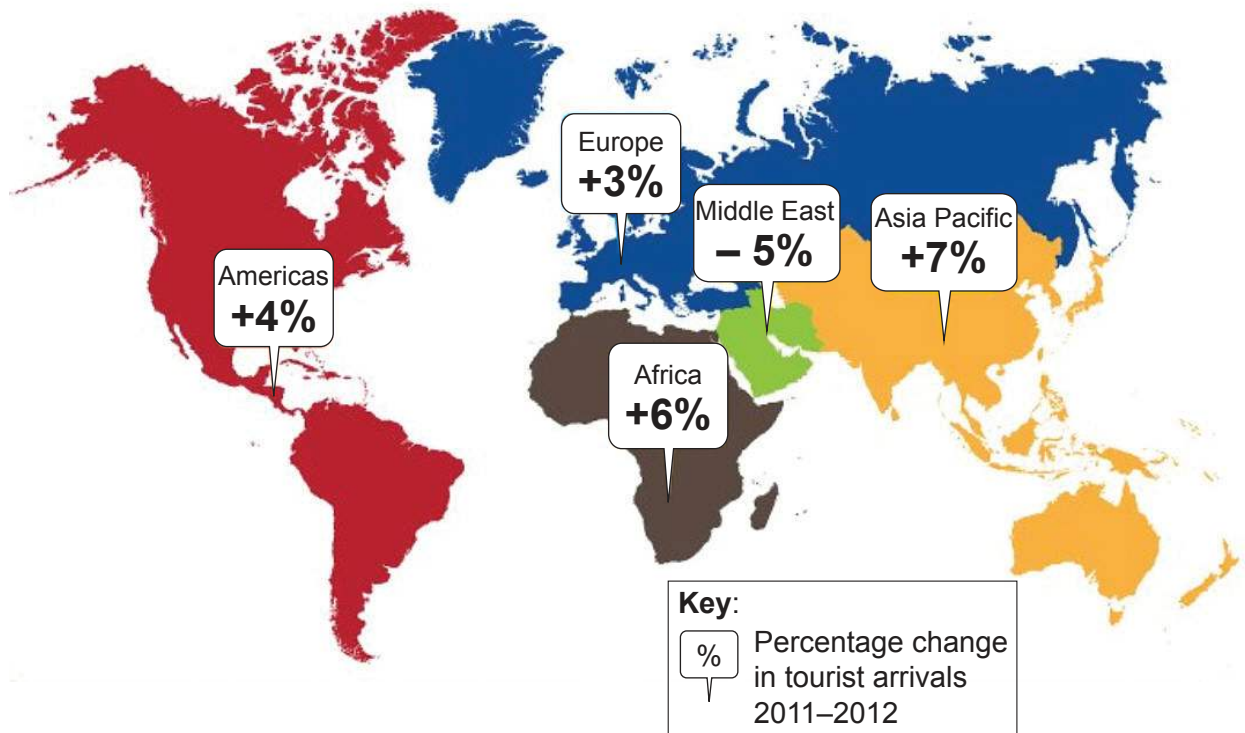
**Option E — Leisure, sport and tourism**

10. The diagram shows information about international tourist arrivals in 2012.

**International tourist arrivals, 2012**



**Percentage change in international tourist arrivals, 2011–2012**



[Source: World Tourism Organization (2015), International tourist arrivals up 4% in the first four months of 2015, published 9 July 2015, UNWTO, Madrid (online), available at: [www.unwto.org](http://www.unwto.org), accessed 13 January 2016.  
World Tourism Organization (2015), International Tourism 2014, infographic published 9 July 2015, UNWTO, Madrid (online), available at: [http://dtxqtq4w60xqpw.cloudfront.net/sites/all/files/pdf/unwto\\_int\\_tourism\\_ita\\_itr\\_en\\_july\\_2015.pdf](http://dtxqtq4w60xqpw.cloudfront.net/sites/all/files/pdf/unwto_int_tourism_ita_itr_en_july_2015.pdf), accessed 13 January 2016.]

**Turn over**

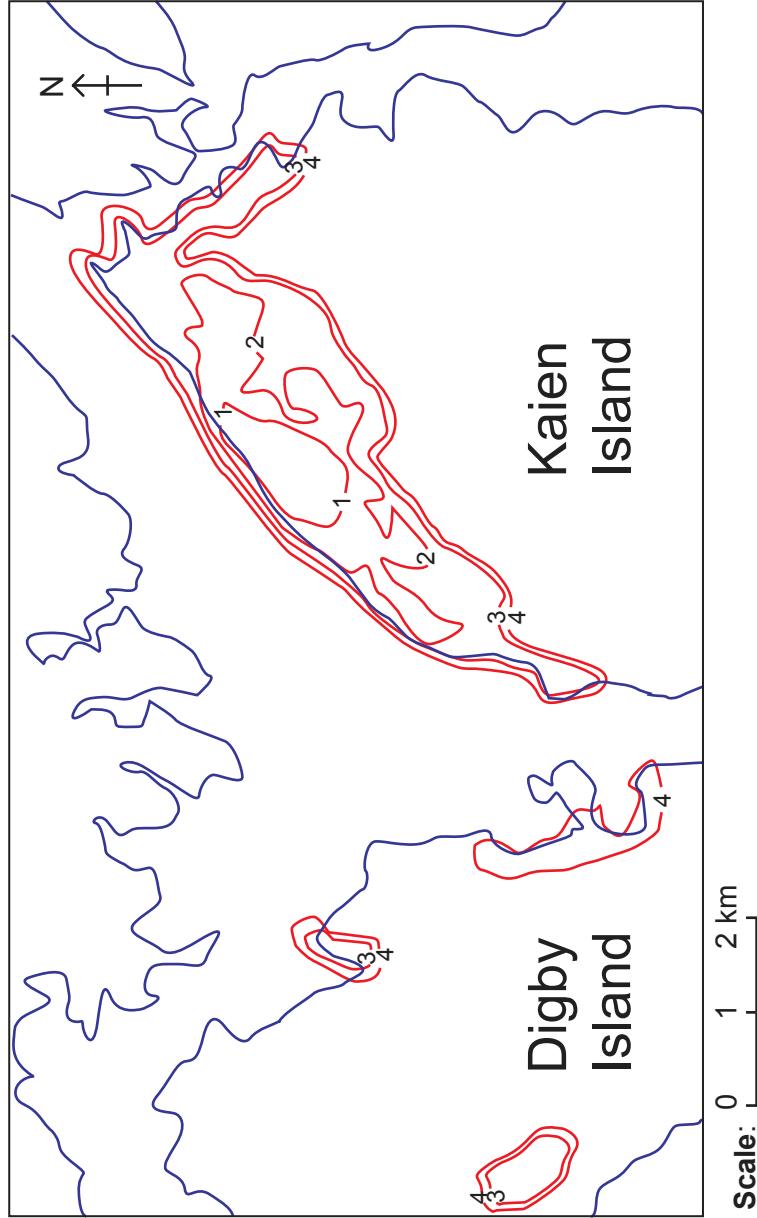
**Option B — Oceans and their coastal margins**

3. Refer only to **Map B** on page 7 and its key on the right (**do not refer to Map A**). The question booklet contains the information relating to this resource.

**Option F — The geography of food and health**

12. Refer to **Map A** on this page, **Map B** on page 7 and its key on the right. The question booklet contains the information relating to these resources.

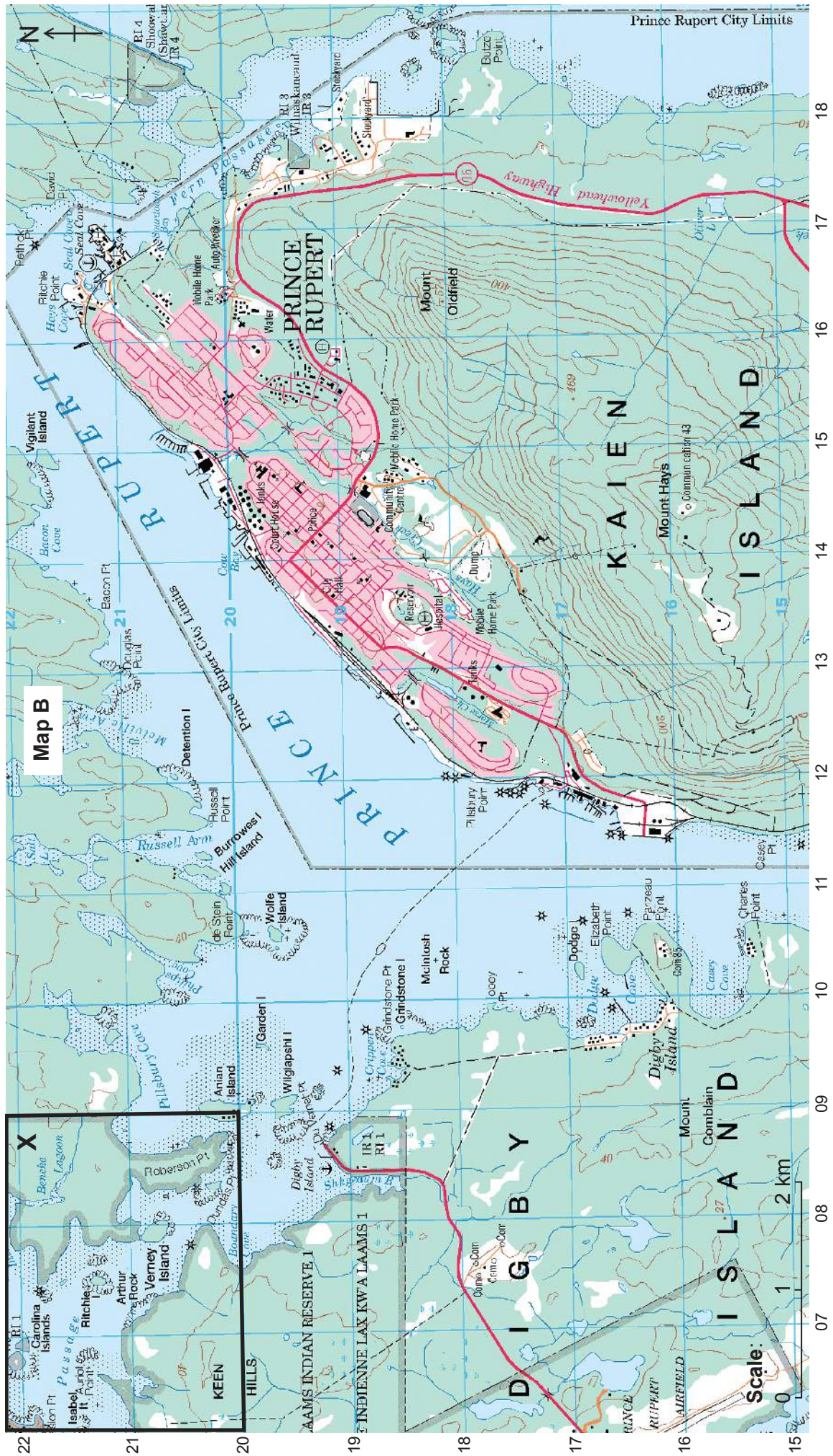
**Map A**



**Key (refers to Map B):**

	Dual highway, hard surface
	Road, hard surface, more than 2 lanes, highway route number
	Road, hard surface, 2 lanes
	Road, loose or stabilized surface, all season, 2 lanes or more
	Road, loose or stabilized surface, all season, less than 2 lanes
	Vehicle track or winter road; gate
	Trail, cut line or portage; portage, short
	Built-up area; street; park/sports field
	Railway, single track, multiple tracks, side track; station
	Bridge; footbridge; tunnel
	Cut; embankment, causeway
	Seaplane base; heliport; navigation light
	Building(s)
	Church; non-Christian place of worship; shrine
	School; elevator; fire station
	Cemetery; historic site or point of interest; greenhouse
	Golf course; ski area; mine
	Oil or natural gas facility; electrical facility
	International boundary with monument
	Boundary, ninth class
	Dam: small; large; carrying road
	Watercourse or shoreline: definite; indefinite
	Rapids; falls (with height in black)
	Lake or pond; slough, intermittent lake or pond
	Foreshore flats or sand in water
	Rocks in water or small island
	Rocky ledge; rocky reef
	Marsh; swamp
	Contours: index; intermediate; approximate
	Cliff or escarpment
	Sand; esker; pingo
	Glacier: ice cap; snowfield
	Wooded area; orchard; vineyard, hopfield

[Source: © International Baccalaureate Organization 2016]



[Source: <http://geogratis.gc.ca>]